

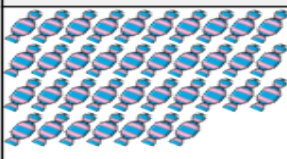
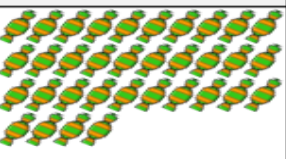
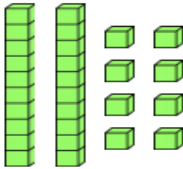
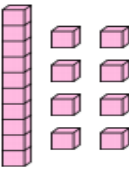


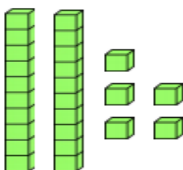
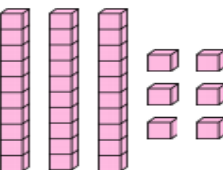
L.O. To compare numbers to 50.


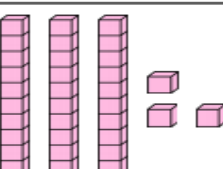
Complete the comparisons.

Sue and Ben each have some pencils. Who has the most pencils? _____ is more than _____ _____ is less than _____ _____ has more pencils.	Sue	Ben
		


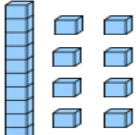

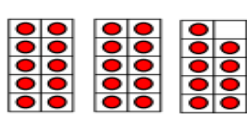
Mo and Asha each have some sweets. Who has the most sweets? _____ is more than _____ _____ is less than _____ _____ has more sweets.	Mo	Asha
		

		_____ is more than _____ _____ is less than _____
--	--	--

		_____ is more than _____ _____ is less than _____
---	---	--


		_____ is more than _____ _____ is less than _____
---	---	--

Complete the table using **more than**, **less than** or **equal to** then write a comparison.

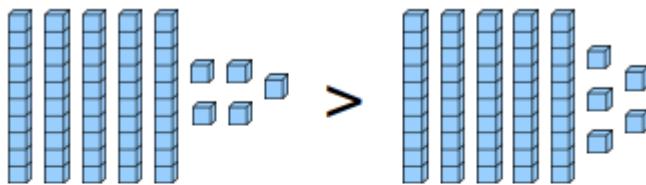
			_____ is more than _____
			_____ is equal to _____
3 tens 5 ones		3 tens 9 ones	_____ is less than _____



Group B has the most sweets.

- A 
- B 

Is Beth correct? Explain how you know.



True or false? Explain how you know.

Represent this as a number comparison.