



Geography

Sensational Safari

Where Is Kenya?



Aim

- I can understand where Kenya is in the world.
- I can locate Kenya on a world map.

Success Criteria

- I can describe where Kenya is located in the world using key words.
- I can tell my partner 3 things I know about the country.
- I can use an atlas independently to locate Kenya on a world map.

Key Words



Africa



continent



country



capital city



Kenya



weather and climate



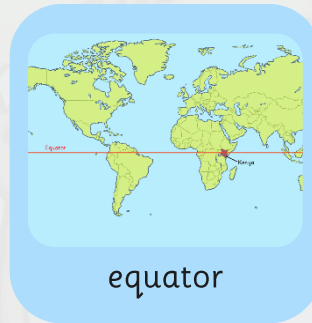
Nairobi




Indian Ocean



flag



equator



atlas

What Do I Know Already? Quick Quiz!



1

Which continent is Kenya in?

2

Can you write any 2 things you know about Africa?


3

What do you think the climate/weather is like in Kenya?

4

What animals do you think live in Kenya?


What Do I Know Already?



Geography: Sensational Safari

K

What I know




W

What I want to know

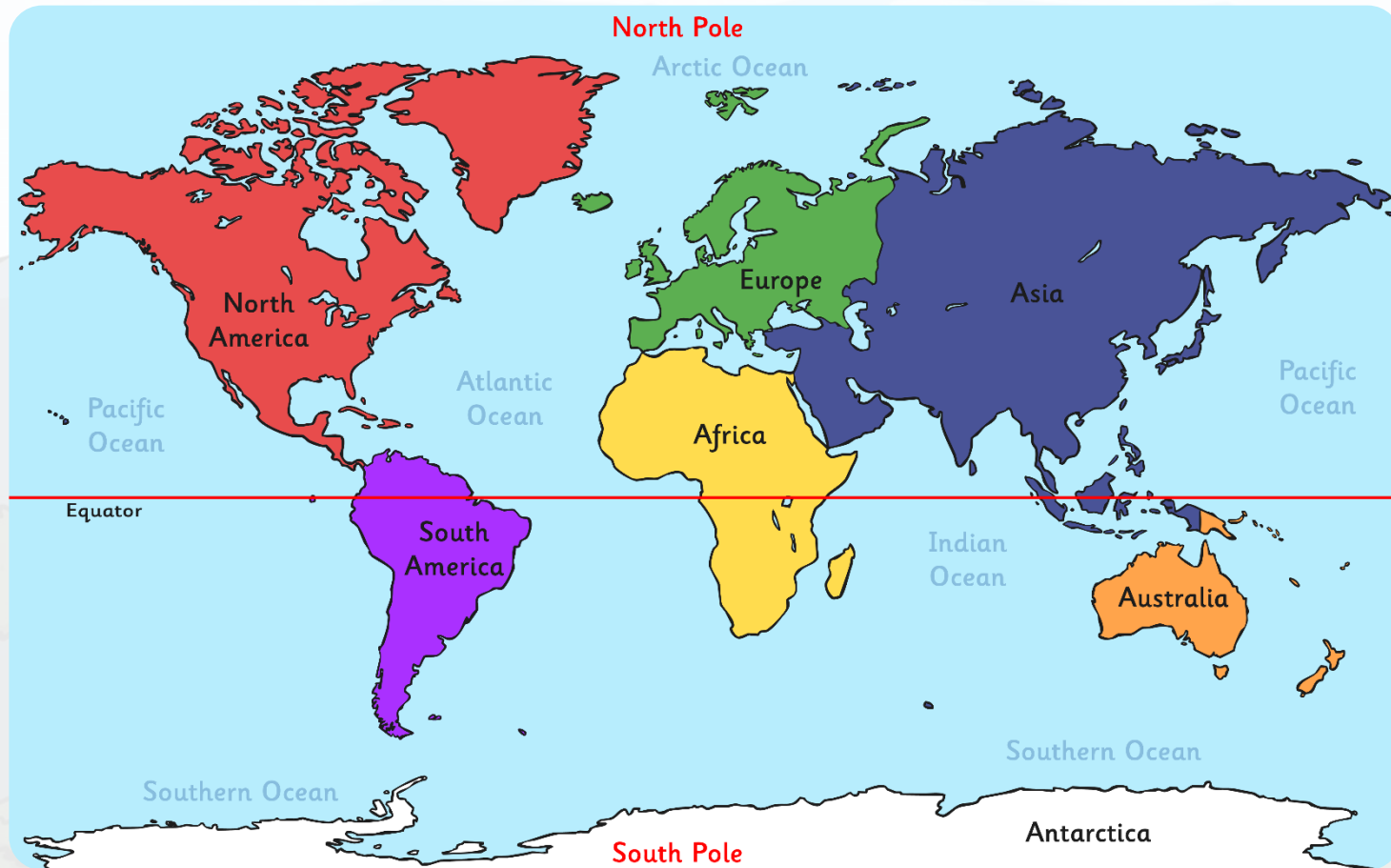


L

What I have learnt



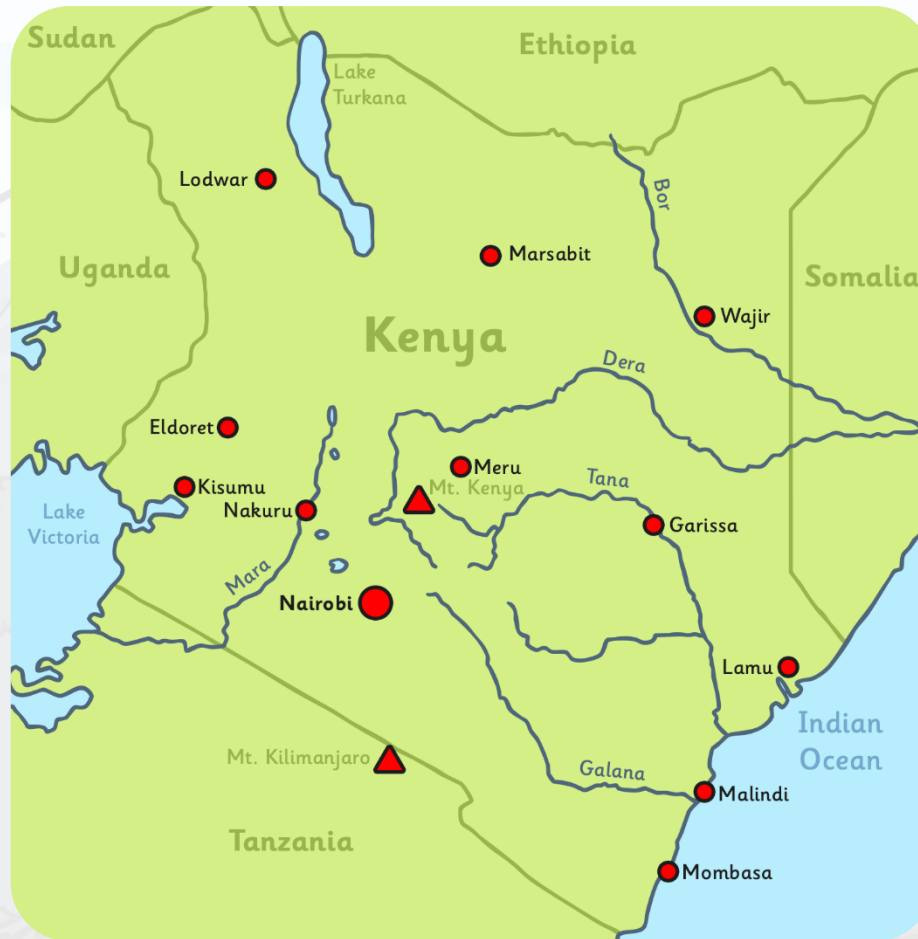
Where Is Kenya?



Where Is Kenya?



Where Is Kenya?



Where Is Kenya?



Kenya is located in East Africa. It is known as the Republic of Kenya.

Kenya's population is around 44 million! Kenya is one small country compared to the vast size of the continent, Africa.



Where Is Kenya?



This is Kenya's national flag:



Nairobi is the capital city and Mombasa is the largest city in Kenya.



Where Is Kenya?




The Tana river is the longest river in Kenya.

Mount Kenya is the highest mountain in Kenya,
and the country itself was named after the mountain!




Kenya Atlas Challenge



Work with your partner to complete this quick activity.
Using an atlas, find a map of Africa.

See how quickly you can answer these questions:

- Can you find the capital city?
- Can you find Mombasa, Mount Kenya or the Tana river?
- Can you find a city in the north of Kenya?
- Which cities are on the coast?
- Name an ocean near to Kenya.
- Name 2 countries which border Kenya



Challenge:

- Which countries border Kenya?
- How many countries can you find and name in Africa?

How many questions did you answer?


Tickets Please!



You are now going to board a flight to Kenya!

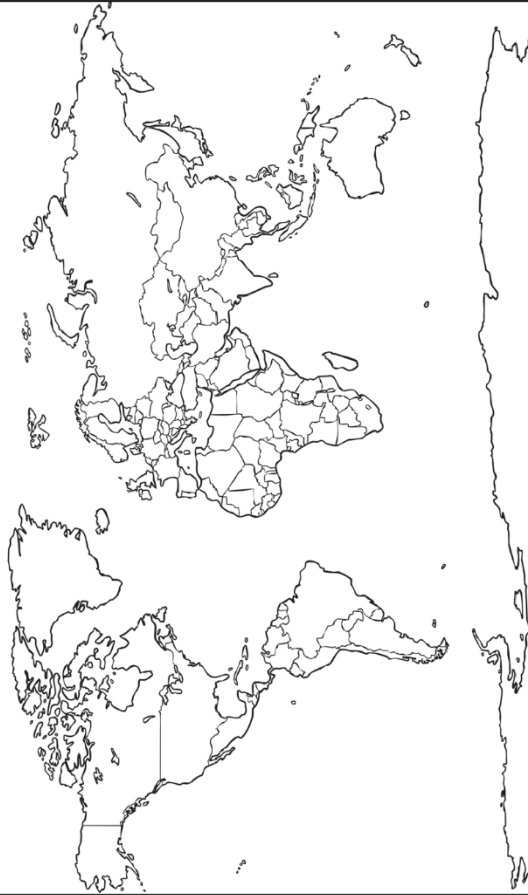
But first you need to get your tickets. Tickets please!

Passport to Kenya

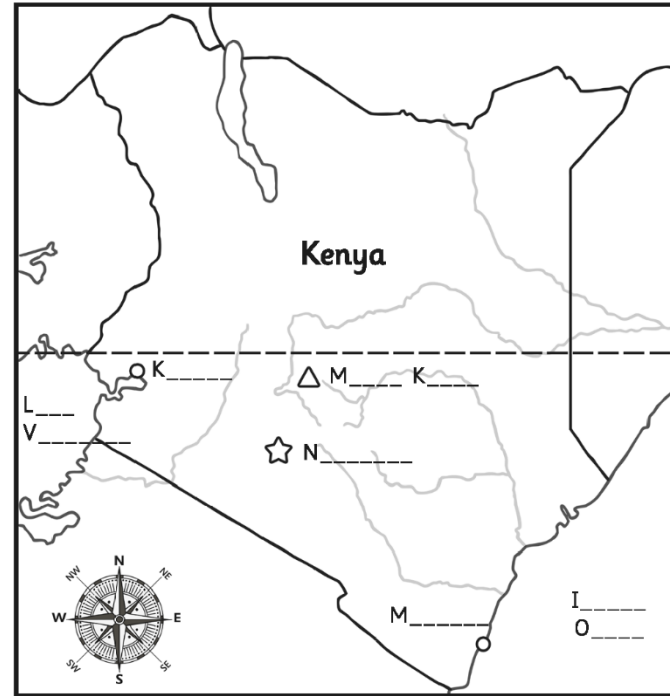


Map of the World

Label Africa and then highlight Kenya.




Map of Kenya



Key



Catch It!



Ready, steady...catch!

How many other countries in Africa can you name?

Can you name any other rivers, mountains, seas or features?

Aim

- I can understand where Kenya is in the world.
- I can locate Kenya on a world map.

Success Criteria

- I can describe where Kenya is located in the world using key words.
- I can tell my partner 3 things I know about the country.
- I can use an atlas independently to locate Kenya on a world map.

