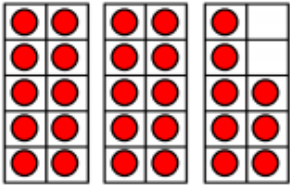
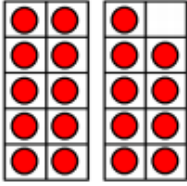
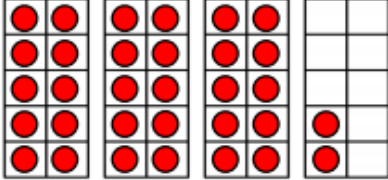


Complete the table.

Number	Tens and Ones	Ten Frame
	2 tens 8 ones	
19	_____ ten _____ ones	
	3 tens 2 ones	

Use the bead strings to complete the sentences.

a 

There is _____ ten and _____ ones.

The number is _____.

b 

There are _____ tens and _____ ones.

The number is _____.

c 

There are _____ tens and _____ one.

The number is _____.